


Adding Coins Activity Sheet

Using three different coins each time, how many totals can you make?
Write them down in the box at the bottom.




Example:

$$\textcircled{1\text{p}} + \textcircled{5\text{p}} + \textcircled{2\text{p}} = 8\text{p}$$

Adding Coins Activity Sheet

Using three different coins each time, how many totals can you make?
Write them down in the box at the bottom.




Example:

$$\textcircled{1\text{p}} + \textcircled{5\text{p}} + \textcircled{10\text{p}} = 16\text{p}$$

Adding Coins Activity Sheet

Using four different coins each time, how many totals can you make?
Write them down in the box at the bottom.



Example:

$$\textcircled{1\text{p}} + \textcircled{5\text{p}} + \textcircled{2\text{p}} + \textcircled{10\text{p}} = 18\text{p}$$